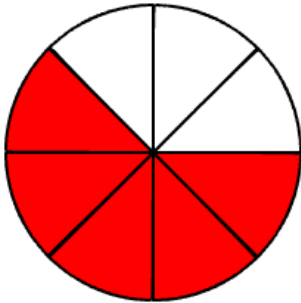


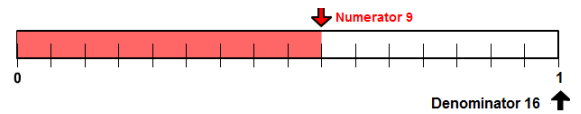
Identify Fractions Pretest Answers

| | | | | |
|----|---|----|--------|------------------|
| 1. | 3 | 7 | $3/7$ | three-sevenths |
| 2. | 5 | 8 | $5/8$ | five-eighths |
| 3. | 3 | 4 | $3/4$ | three-fourths |
| 4. | 3 | 16 | $3/16$ | three-sixteenths |
| 5. | 3 | 5 | $3/5$ | three-fifths |
| 6. | 4 | 5 | $4/5$ | four-fifths |

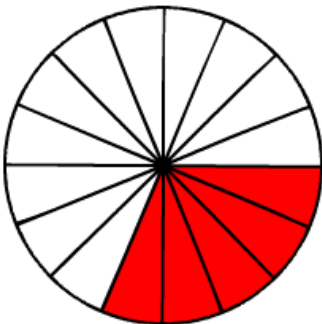
7.



8.



9.



10.

$3/7$ of the cookies are square.